





Name: _____



Date: _____



TWO TRUTHS & ONE LIE!

Use your math skills to determine which of the three statements below is a fib! Explain how you made your decision.

| | |
|---|--|
|  = 4 |  = 16 |
|  = 6 |  = 48 |

1)  :  = 1 : 4

2)  :  = 1 : 8

3)  :  = 3 : 2

My Answer: _____

Key: 3