





Name: \_\_\_\_\_

Date: \_\_\_\_\_



# TWO TRUTHS & ONE LIE!

Use your math skills to determine which of the three statements below is a fib! Explain how you made your decision.

 = 3	 = 6
 = 8	 = 5

$$1) \frac{\text{Earth with X}}{\text{Hat}} \times 2 = \frac{\text{Earth with X}}{4}$$

$$2) \frac{\text{Palm tree}}{\text{Suitcase}} \times \frac{\text{Earth with X}}{\text{Hat}} = \frac{\text{Palm tree}}{\text{Hat}}$$

$$3) \frac{\text{Earth with X}}{\text{Hat}} \times \frac{1}{2} = \frac{\text{Earth with X}}{16}$$

My Answer: \_\_\_\_\_

Key: 2