





Name: \_\_\_\_\_

Date: \_\_\_\_\_



# TWO TRUTHS & ONE LIE!

Use your math skills to determine which of the three statements below is a fib! Explain how you made your decision.

 = 11	 = 7
 = 14	 = 6

1) 
$$\frac{\text{cactus}}{\text{toaster}} - \frac{1}{\text{refrigerator}} = \frac{\text{key}}{\text{refrigerator}}$$

2) 
$$\frac{\text{toaster}}{\text{key}} + \frac{\text{cactus}}{\text{key}} = 1 \frac{2}{\text{key}}$$

3) 
$$\frac{\text{cactus}}{\text{toaster}} + \frac{\text{key}}{\text{refrigerator}} > 2$$

My Answer: \_\_\_\_\_

Key: 3