

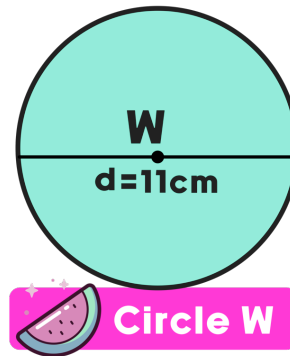
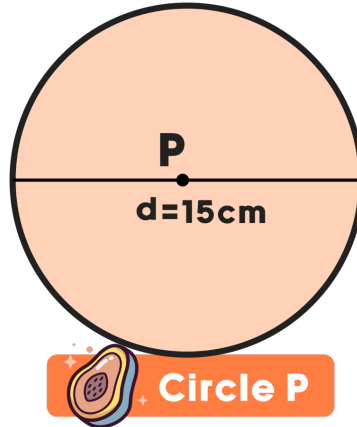
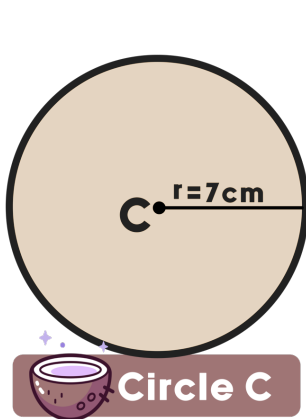
Name: _____

Date: _____



TWO TRUTHS & ONE LIE!

Use your math skills to determine which of the three statements below is a fib! Explain how you made your decision.



- 1) All three circles have an area that is less than 180 square centimeters.
- 2) The difference between the circumference of Circle P and Circle C is more than 5 cm.
- 3) Circle W has an approximate area of 95 cm^2 and an approximate circumference of 34.6 cm.

My Answer: _____

Key: 2