

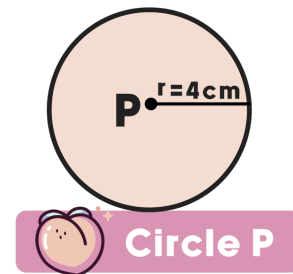
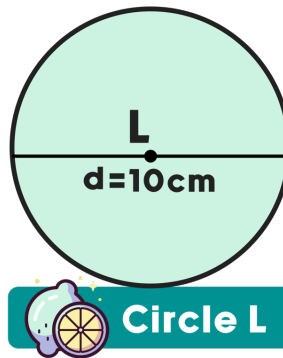
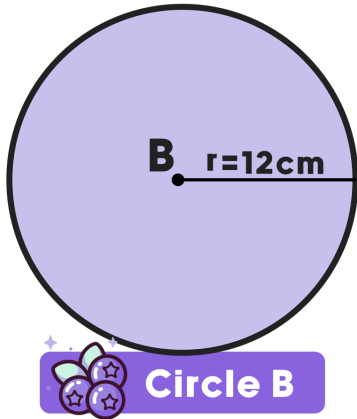
Name: _____

Date: _____



TWO TRUTHS & ONE LIE!

Use your math skills to determine which of the three statements below is a fib! Explain how you made your decision.



1) Circle B has an approximate area of 452.4 cm^2 .

2) The difference between the circumference of Circle L and Circle P is approximately 6.3 cm.

3) The area of Circle B is approximately 422 square centimeters larger than the area of Circle P.

My Answer: _____

Key: 3