





Name: _____

Date: _____



TWO TRUTHS & ONE LIE!

Use your math skills to determine which of the three statements below is a fib! Explain how you made your decision.

 = 96	 = 200
 = 134	 = 300

1)  is **67%** of  .

2)  is **48%** of  .

3)  is **150%** of  .

My Answer: _____

Key: 2