





Name: _____

Date: _____



TWO TRUTHS & ONE LIE!

Use your math skills to determine which of the three statements below is a fib! Explain how you made your decision.

 = 70	 = 35
 = 49	 = 100

1)  is 70% of  .

2)  is 70% of  .

3)  is 70% of  .

My Answer: _____

Key: 3