





Name: \_\_\_\_\_

Date: \_\_\_\_\_



# TWO TRUTHS & ONE LIE!

Use your math skills to determine which of the three statements below is a fib! Explain how you made your decision.

 = <b>50</b>	 = <b>12</b>
 = <b>16</b>	 = <b>100</b>

1)  is **75%** of  .

2)  is **34%** of  .

3)  is **12%** of  .

My Answer: \_\_\_\_\_

Key: 2