


Name: _____


Date: _____





TWO TRUTHS & ONE LIE!

Use your math skills to determine which of the three statements below is a fib! Explain how you made your decision.



A)  → 4

B)  → 7

C)  → 5

My Answer: _____

Key: A