

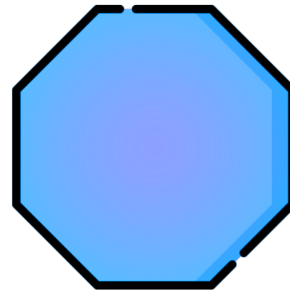
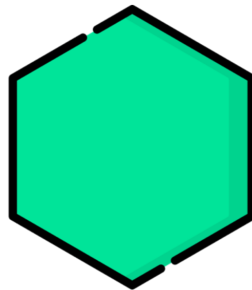
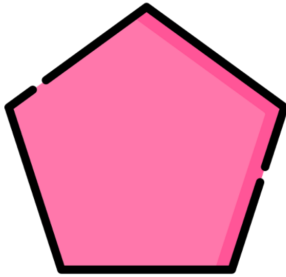
Name: _____

Date: _____



TWO TRUTHS & ONE LIE!

Use your math skills to determine which of the three statements below is a fib! Explain how you made your decision.



A)  has 5 sides.

B)  is a hexagon.

C)  has more than 10 sides.

My Answer: _____

Key: C