

Name: _____

Date: _____



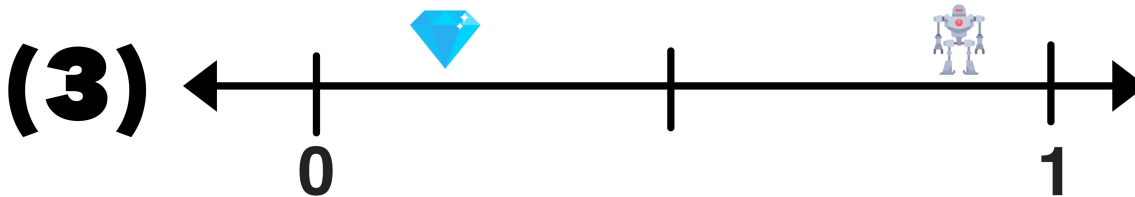

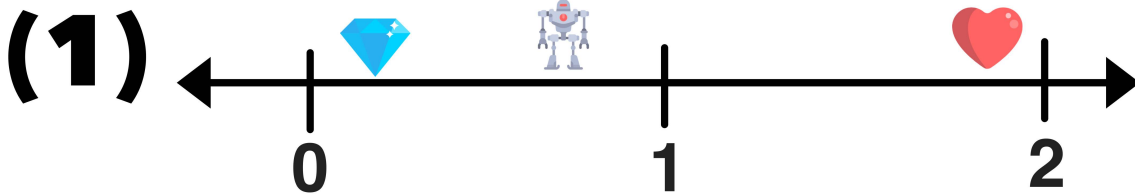
TWO TRUTHS & ONE LIE!

Use your math skills to determine which of the three statements below is a dirty lie! Explain how you made your decision.

$$\text{Heart} = \frac{9}{5}$$

$$\text{Robot} = \frac{7}{9}$$

$$\text{Diamond} = \frac{1}{5}$$



My Answer: _____

Key: 2