


Name: \_\_\_\_\_


Date: \_\_\_\_\_






# TWO TRUTHS & ONE LIE!


Use your math skills to determine which of the three statements below is a dirty lie! Explain how you made your decision.

 =  $\frac{1}{4}$

 =  $\frac{1}{8}$

 =  $\frac{1}{15}$

**(1)**   $>$  

**(2)**  = one eighth

**(3)**   $>$  one thirteenth

My Answer: \_\_\_\_\_

Key: 3