

Name: \_\_\_\_\_

Date: \_\_\_\_\_





# TWO TRUTHS & ONE LIE!

Use your math skills to determine which of the three statements below is a dirty lie! Explain how you made your decision.



Each  is one square unit in all of the figures below.

**(1)** These figures have the same area.





These figures have the same Area.

**(2)**



**(3)**



These figures have the same Area.

My Answer: \_\_\_\_\_

Key: 3