



Name: \_\_\_\_\_

Date: \_\_\_\_\_




# TWO TRUTHS & ONE LIE!

Use your math skills to determine which of the three statements below is a dirty lie! Explain how you made your decision.



**(1)**



Total = 16

**(2)**



Total = 24

**(3)**



Total = 49

My Answer: \_\_\_\_\_

Key: 2