

Name: \_\_\_\_\_

Date: \_\_\_\_\_




# TWO TRUTHS & ONE LIE!

Use your math skills to determine which of the three statements below is a dirty lie! Explain how you made your decision.


$$4 + 4 + 4 + 4$$

**(1)**




$$3 \text{ times } 2$$

**(2)**



**(3)**

$$5 \text{ groups of three}$$



My Answer: \_\_\_\_\_

Key: 2