

Name: _____





Date: _____



TWO TRUTHS & ONE LIE!

Use your math skills to determine which of the three statements below is a dirty lie! Explain how you made your decision.



- 1) There are 20 vegetables in total.
- 2) The number of  is equal to the number of .
- 3) The number of  is two times as large as the number of .

My Answer: _____

Key: 2