

Name: _____

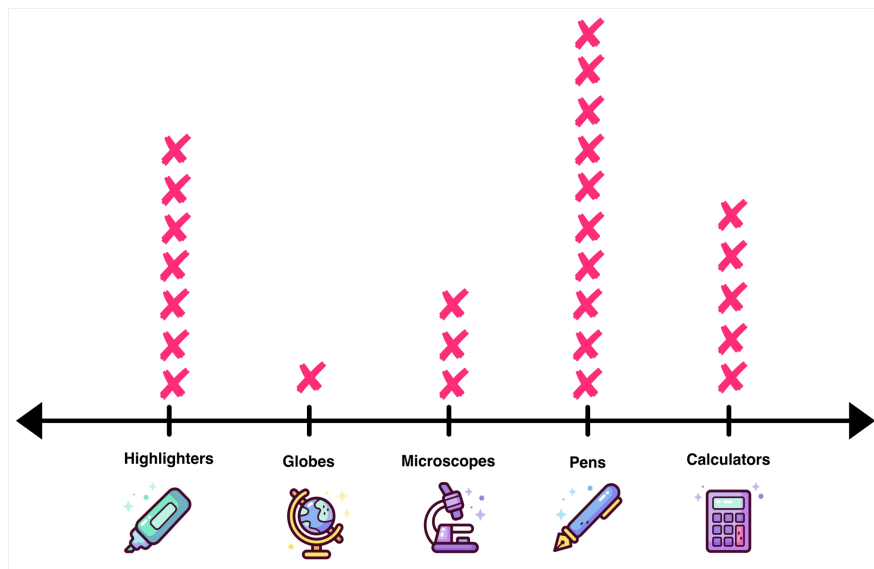
Date: _____





TWO TRUTHS & ONE LIE!

Use your math skills to determine which of the three statements below is a fib! Explain how you made your decision.

CLASSROOM SUPPLIES



1)  were counted 9 times.

2)  were counted 2 more times than .

3) There is only one  in the classroom.

My Answer: _____

Key: 1