

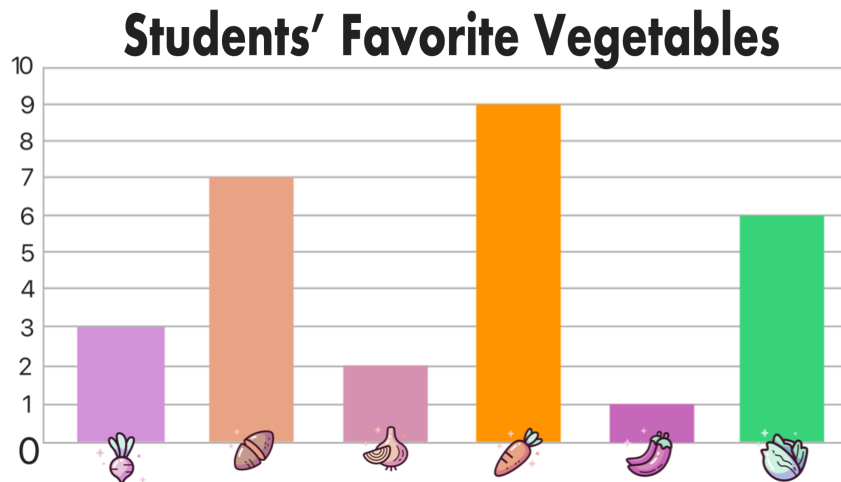
Name: \_\_\_\_\_



Date: \_\_\_\_\_



# TWO TRUTHS & ONE LIE!

Use your math skills to determine which of the three statements below is a fib! Explain how you made your decision.



1)  had the most votes and  
 had the fewest votes.

2)  had 4 more votes than .

3)  had 6 votes and  had 2.

My Answer: \_\_\_\_\_

Key: 2