

Name: _____






Date: _____




TWO TRUTHS & ONE LIE!

Use your math skills to determine which of the three statements below is a fib! Explain how you made your decision.

PINK DONUTS SOLD

Monday	
Tuesday	
Wednesday	
Thursday	
Friday	

 = 1 donut sold

- 1) The most donuts were sold on Thursday.
- 2) There were 3 more donuts sold on Wednesday than there were on Monday.
- 3) Exactly 7 donuts were sold on Friday.

My Answer: _____

Key: 2