

Name: \_\_\_\_\_

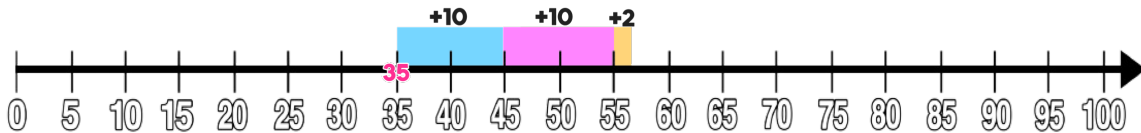
Date: \_\_\_\_\_



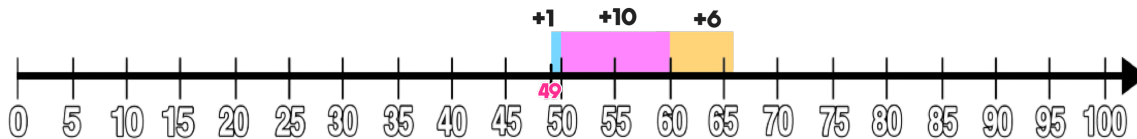
# TWO TRUTHS & ONE LIE!

Use your math skills to determine which of the three statements below is a fib! Explain how you made your decision.

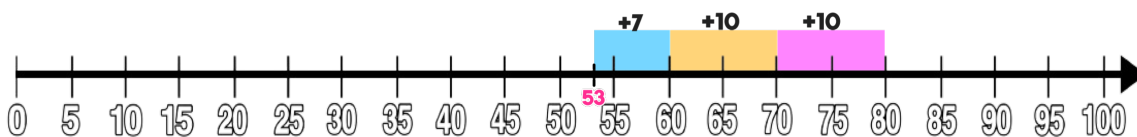
1)  $35 + 22 = 57$



2)  $49 + 17 = 66$



3)  $53 + 29 = 82$



My Answer: \_\_\_\_\_

Key: 3 (the number line is incomplete)