



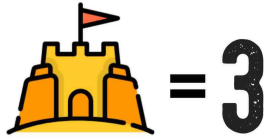
Name: _____

Date: _____



TWO TRUTHS & ONE LIE!

Use your math skills to determine which of the three statements below is a dirty lie! Explain how you made your decision.



(1) $\frac{1}{2} < \frac{\text{Sandcastle}}{\text{Bus}}$

(2) $\frac{\text{Sandcastle}}{1} = \frac{2}{\text{Beach Ball}}$

(3) $\frac{\text{Bus}}{12} < \frac{\text{Bus}}{8}$

My Answer: _____

Key: 2