

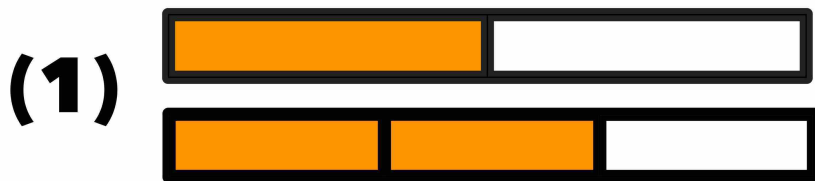
Name: _____

Date: _____

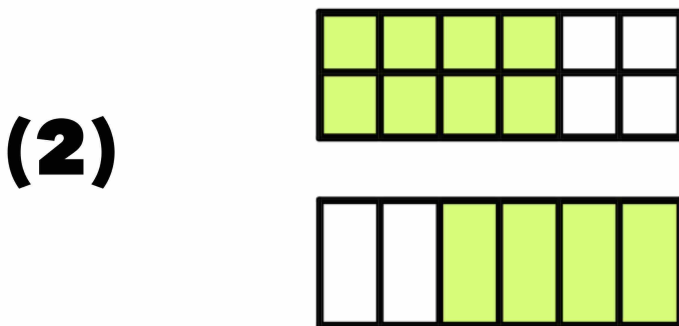


TWO TRUTHS & ONE LIE!

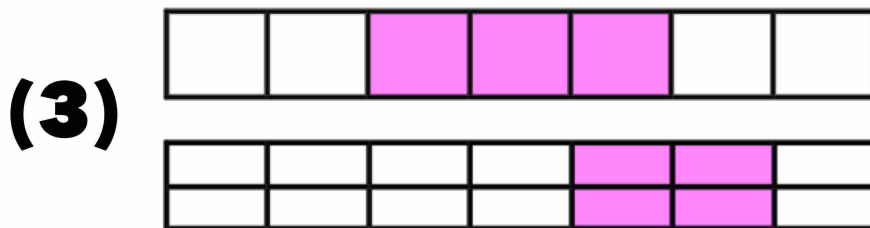
Use your math skills to determine which of the three statements below is a dirty lie! Explain how you made your decision.



$$\frac{1}{2} > \frac{3}{4}$$



$$\frac{8}{12} = \frac{4}{6}$$



$$\frac{3}{7} > \frac{4}{14}$$

My Answer: _____

Key: 1