

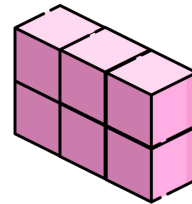
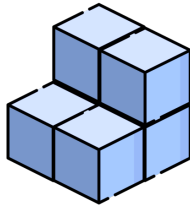

Name: _____

Date: _____



TWO TRUTHS & ONE LIE!

Use your math skills to determine which of the three statements below is a fib! Explain how you made your decision.



1)  has a volume of 16 square units.

2) The volume of  is twice as large as the volume of .

3)  and  both have a volume of 6 square units.

My Answer: _____

Key: 1