





Name: _____



Date: _____









TWO TRUTHS & ONE LIE!

Use your math skills to determine which of the three statements below is a fib! Explain how you made your decision.

 = 5.75	 = 3.1
 = 0.5	 = 2.25

1)  < 

2)  +  +  = 

3)  -  = 3.5

My Answer: _____

Key: 2