

Name: _____

Date: _____



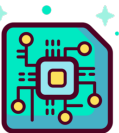



TWO TRUTHS & ONE LIE!

Use your math skills to determine which of the three statements below is a fib! Explain how you made your decision.

 = 7	 = 51
 = 13	 = 9

$$1) \text{  \div (30 - \text{)} = 3$$

$$2) \text{  + \text{} \times \text{} - \text{} = 101$$

$$3) \text{  + \text{} \times (22 - \text{)} = 242$$

My Answer: _____

Key: 3