

Name: _____

Date: _____





TWO TRUTHS & ONE LIE!



Use your math skills to determine which of the three statements below is a fib! Explain how you made your decision.

A)  \rightarrow  = 29

$\underbrace{\hspace{15em}}_{35}$

B)  \rightarrow  = 11

$\underbrace{\hspace{15em}}_{35}$

C)  \rightarrow  = 19

$\underbrace{\hspace{15em}}_{35}$

My Answer: _____

Key: C