

Name: _____



Date: _____







TWO TRUTHS & ONE LIE!

Use your math skills to determine which of the three statements below is a fib! Explain how you made your decision.

| | |
|--|---|
|  = 7 |  = 9 |
|  = 8 |  = 11 |

1) **110** ÷  = 

2) **88** ÷  = 

3)  = **63** ÷ 

My Answer: _____

Key: 1