





Name: _____

Date: _____



TWO TRUTHS & ONE LIE!

Use your math skills to determine which of the three statements below is a fib! Explain how you made your decision.

 = 12	 = 6
 = 4	 = 9

1) $36 \div \text{Yellow robot with blue visor} = \text{Yellow robot with blue visor}$

2) $108 \div \text{Grey robot} = \text{Red robot}$

3) $\text{Yellow robot with blue visor} = 45 \div \text{Grey robot}$

My Answer: _____

Key: 3