





Name: _____



Date: _____





TWO TRUTHS & ONE LIE!

Use your math skills to determine which of the three statements below is a fib! Explain how you made your decision.

 = 3	 = 9
 = 6	 = 12

1)  ×  = 82

2) 36 =  × 

3) 54 =  × 

My Answer: _____

Key: 1