





Name: _____

Date: _____





TWO TRUTHS & ONE LIE!

Use your math skills to determine which of the three statements below is a fib! Explain how you made your decision.

| | |
|---|--|
|  = 3 |  = 7 |
|  = 5 |  = 8 |

1)  ×  = 21

2) 45 =  × 

3)  ×  = 56

My Answer: _____

Key: 2